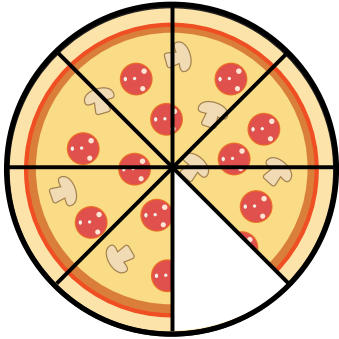


Name: _____

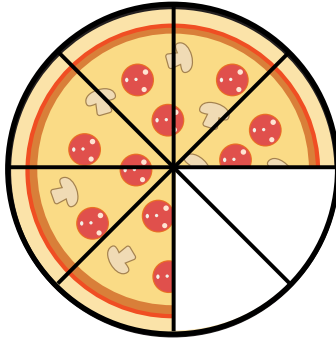
Date: _____

Fraction of Pizza

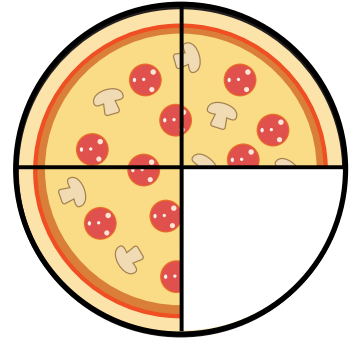
Circle the fraction of each pizza.



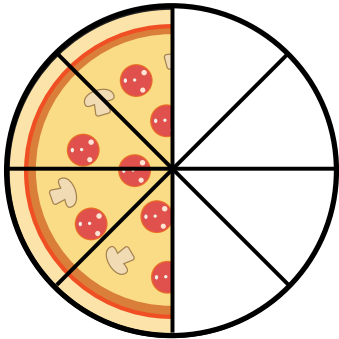
$\frac{1}{2}$ $\frac{3}{8}$ $\frac{7}{8}$



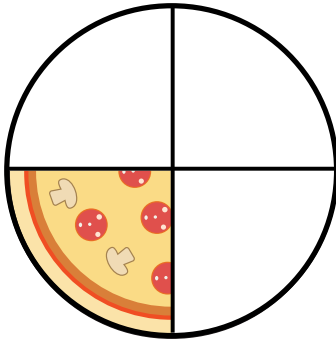
$\frac{1}{2}$ $\frac{3}{8}$ $\frac{6}{8}$



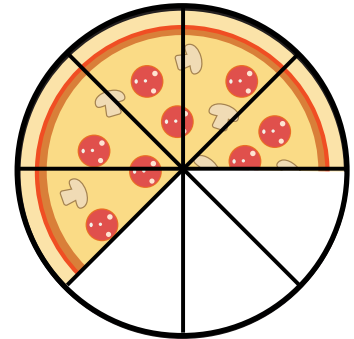
$\frac{1}{2}$ $\frac{3}{4}$ $\frac{5}{8}$



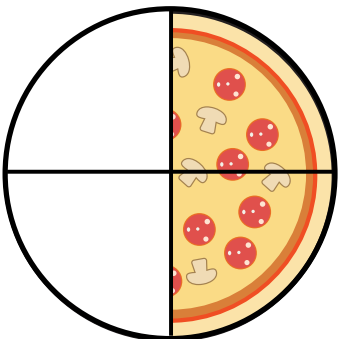
$\frac{1}{2}$ $\frac{3}{8}$ $\frac{5}{8}$



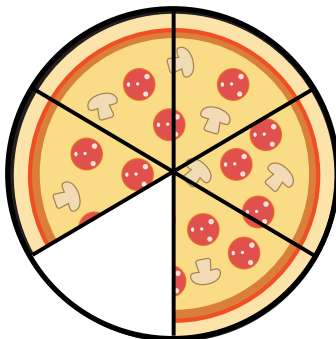
$\frac{1}{2}$ $\frac{1}{4}$ $\frac{5}{8}$



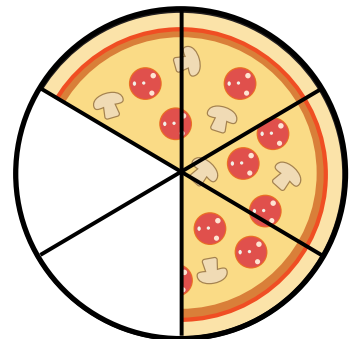
$\frac{1}{2}$ $\frac{3}{8}$ $\frac{5}{8}$



$\frac{1}{2}$ $\frac{3}{8}$ $\frac{5}{8}$



$\frac{1}{2}$ $\frac{3}{8}$ $\frac{5}{6}$

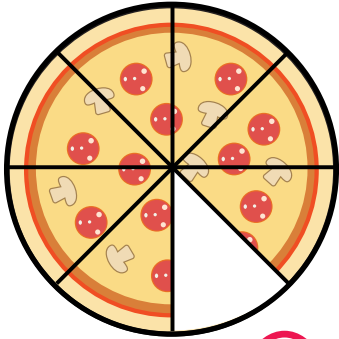


$\frac{4}{6}$ $\frac{3}{8}$ $\frac{5}{8}$

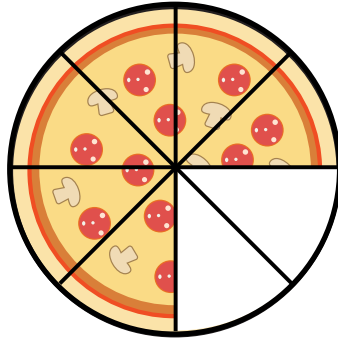
ANSWER KEY

Fraction of Pizza

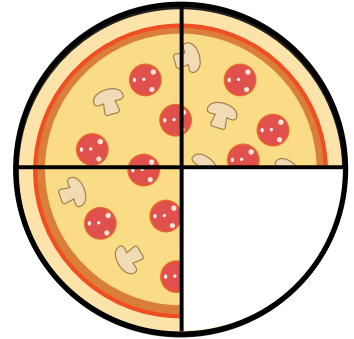
Circle the fraction of each pizza.



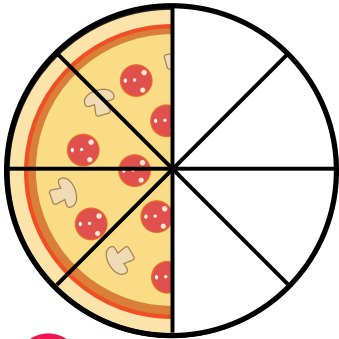
$\frac{1}{2}$ $\frac{3}{8}$ $\frac{7}{8}$



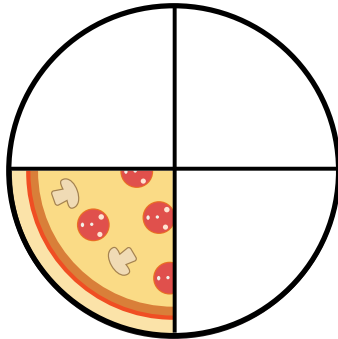
$\frac{1}{2}$ $\frac{3}{8}$ $\frac{6}{8}$



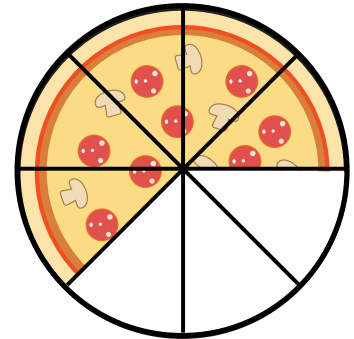
$\frac{1}{2}$ $\frac{3}{4}$ $\frac{5}{8}$



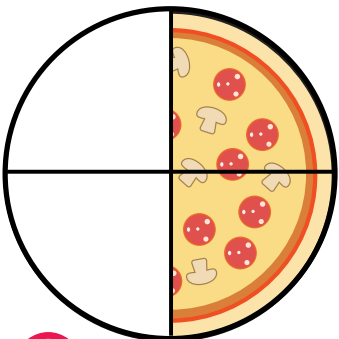
$\frac{1}{2}$ $\frac{3}{8}$ $\frac{5}{8}$



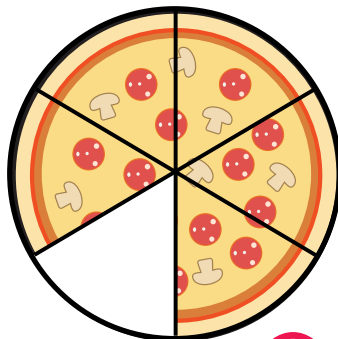
$\frac{1}{2}$ $\frac{1}{4}$ $\frac{5}{8}$




$\frac{1}{2}$ $\frac{3}{8}$ $\frac{5}{8}$



$\frac{1}{2}$ $\frac{3}{8}$ $\frac{5}{8}$



$\frac{1}{2}$ $\frac{3}{8}$ $\frac{5}{6}$



$\frac{4}{6}$ $\frac{3}{8}$ $\frac{5}{8}$