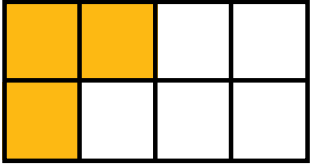


Name: \_\_\_\_\_

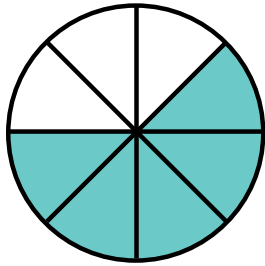
Date: \_\_\_\_\_

## Fraction of Shapes

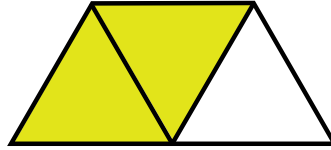
Write the fraction for the shaded area of each shape.




\_\_\_\_\_



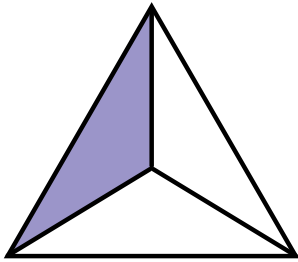
\_\_\_\_\_




\_\_\_\_\_



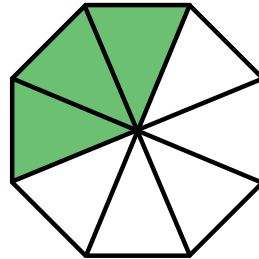
\_\_\_\_\_




\_\_\_\_\_




\_\_\_\_\_



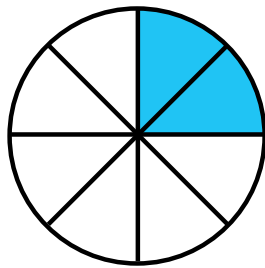
\_\_\_\_\_



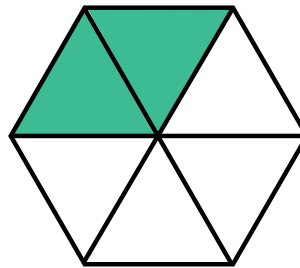
\_\_\_\_\_



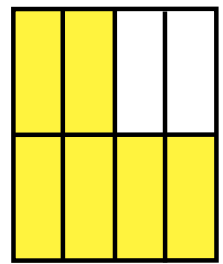
\_\_\_\_\_



\_\_\_\_\_



\_\_\_\_\_

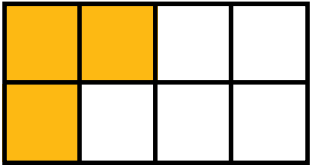


\_\_\_\_\_

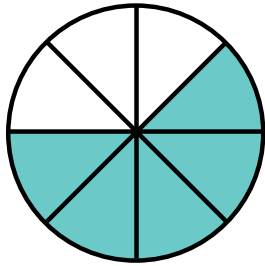
ANSWER KEY

Fraction of Shapes


Write the fraction for the shaded area of each shape.




$$\frac{3}{8}$$



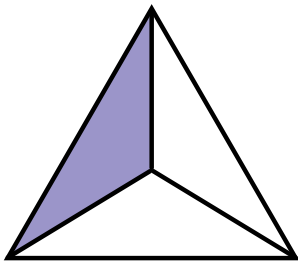
$$\frac{5}{8}$$




$$\frac{2}{3}$$



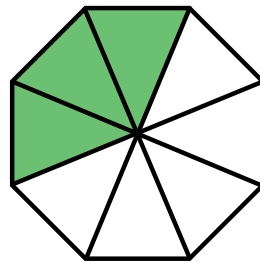
$$\frac{3}{5}$$




$$\frac{1}{3}$$




$$\frac{3}{5}$$



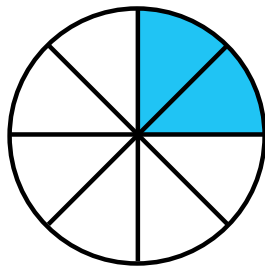
$$\frac{3}{8}$$



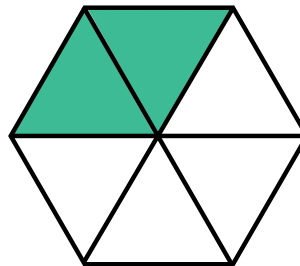
$$\frac{1}{4}$$



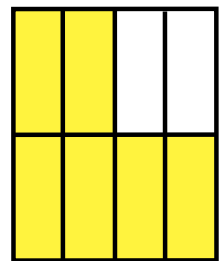
$$\frac{5}{10} \text{ or } \frac{1}{2}$$



$$\frac{2}{8} \text{ or } \frac{1}{4}$$



$$\frac{2}{6} \text{ or } \frac{1}{3}$$



$$\frac{6}{8} \text{ or } \frac{3}{4}$$