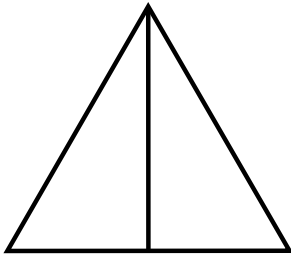


Name: _____

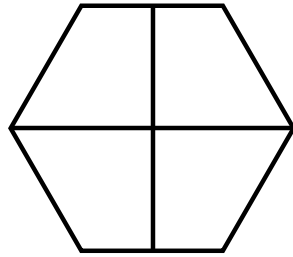
Date: _____

Fraction of Shapes Coloring


Color each shape to represent the fraction shown.




$$\frac{1}{2}$$



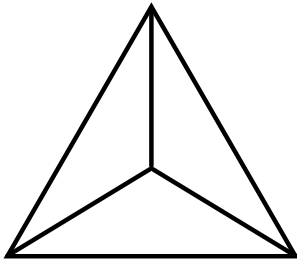
$$\frac{3}{4}$$




$$\frac{3}{8}$$



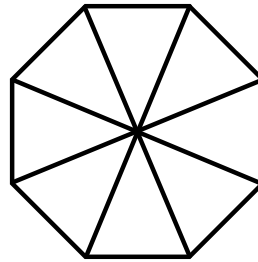
$$\frac{1}{4}$$




$$\frac{1}{3}$$



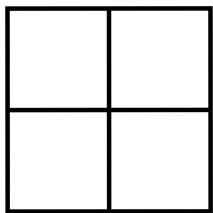
$$\frac{2}{5}$$



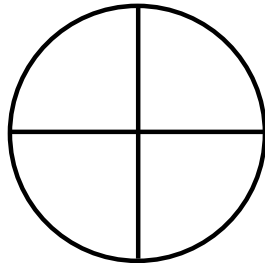
$$\frac{3}{8}$$




$$\frac{3}{4}$$



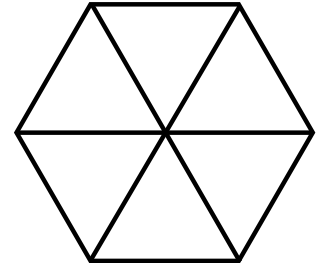
$$\frac{1}{2}$$



$$\frac{3}{4}$$



$$\frac{1}{2}$$

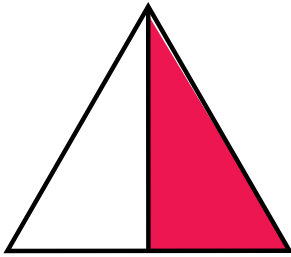


$$\frac{5}{6}$$

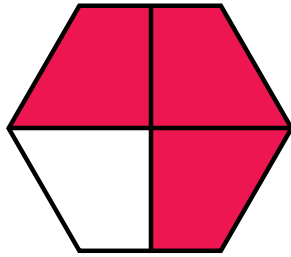
ANSWER KEY

Fraction of Shapes Coloring

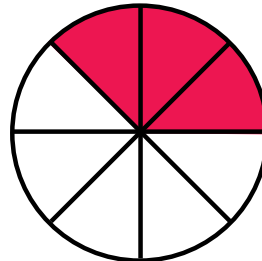
Color each shape to represent the fraction shown.




$$\frac{1}{2}$$



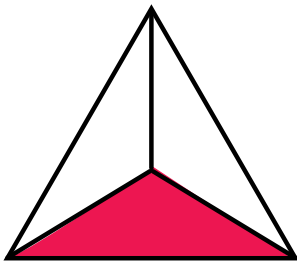
$$\frac{3}{4}$$




$$\frac{3}{8}$$



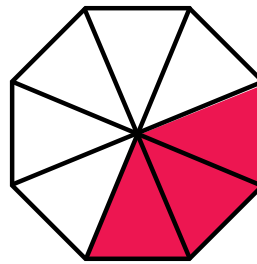
$$\frac{1}{4}$$




$$\frac{1}{3}$$




$$\frac{2}{5}$$



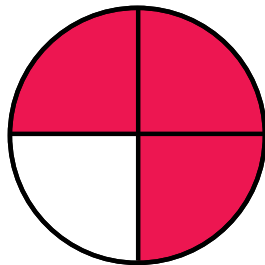
$$\frac{3}{8}$$



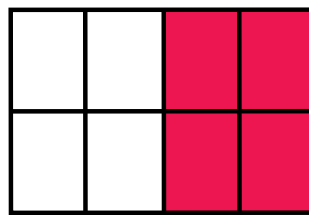
$$\frac{3}{4}$$



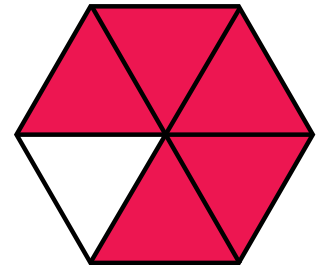
$$\frac{1}{4}$$



$$\frac{3}{4}$$



$$\frac{1}{2}$$



$$\frac{5}{6}$$