


Name: \_\_\_\_\_

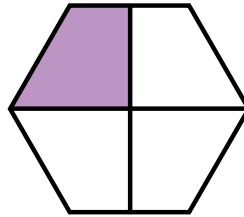
Date: \_\_\_\_\_

## Fraction of Shapes


Circle the fraction of each shape.




$\frac{3}{4}$     $\frac{1}{8}$     $\frac{5}{8}$



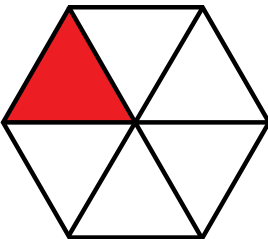
$\frac{3}{4}$     $\frac{2}{4}$     $\frac{1}{4}$



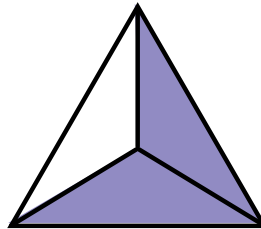
$\frac{2}{5}$     $\frac{3}{5}$     $\frac{4}{5}$



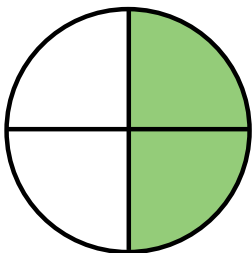
$\frac{1}{4}$     $\frac{1}{2}$     $\frac{3}{4}$



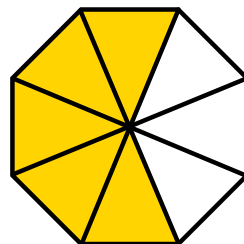
$\frac{2}{6}$     $\frac{1}{6}$     $\frac{1}{3}$



$\frac{1}{3}$     $\frac{2}{3}$     $\frac{1}{2}$



$\frac{1}{4}$     $\frac{2}{3}$     $\frac{1}{2}$



$\frac{1}{2}$     $\frac{3}{8}$     $\frac{5}{8}$



$\frac{1}{4}$     $\frac{1}{2}$     $\frac{1}{3}$

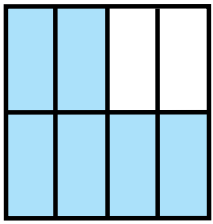


$\frac{1}{4}$     $\frac{3}{4}$     $\frac{7}{8}$

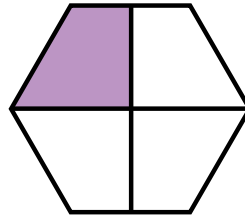
ANSWER KEY

Fraction of Shapes


Circle the fraction of each shape.



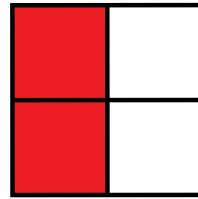
$\frac{3}{4}$   $\frac{1}{8}$   $\frac{5}{8}$



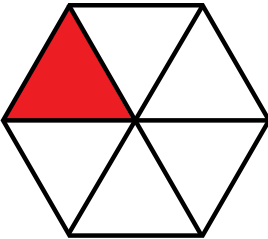
$\frac{3}{4}$   $\frac{2}{4}$   $\frac{1}{4}$



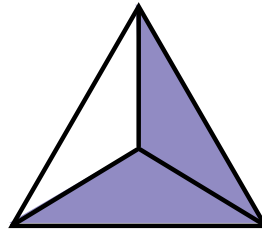
$\frac{2}{5}$   $\frac{3}{5}$   $\frac{4}{5}$



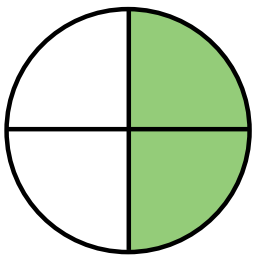
$\frac{1}{4}$   $\frac{1}{2}$   $\frac{3}{4}$



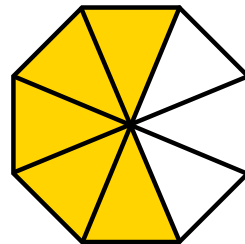
$\frac{2}{6}$   $\frac{1}{6}$   $\frac{1}{3}$



$\frac{1}{3}$   $\frac{2}{3}$   $\frac{1}{2}$



$\frac{1}{4}$   $\frac{2}{3}$   $\frac{1}{2}$



$\frac{1}{2}$   $\frac{3}{8}$   $\frac{5}{8}$



$\frac{1}{4}$   $\frac{1}{2}$   $\frac{1}{3}$



$\frac{1}{4}$   $\frac{3}{4}$   $\frac{7}{8}$